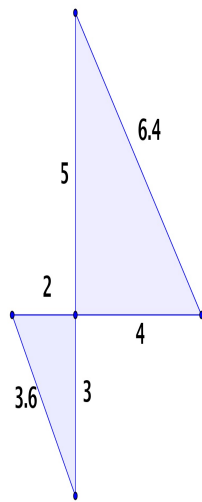


Similar Triangles

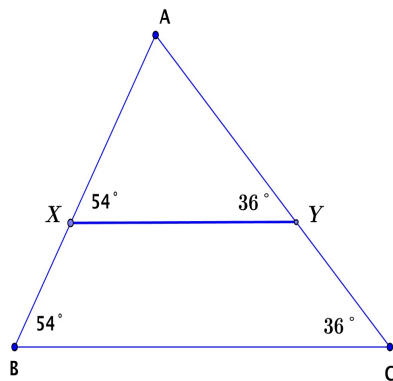
Match the pair of triangles in the left column with the Similarity Theorem on the right. You may have more than one pair of triangles matching the same Theorem on the right. It is also possible that the triangles are not similar.

1.



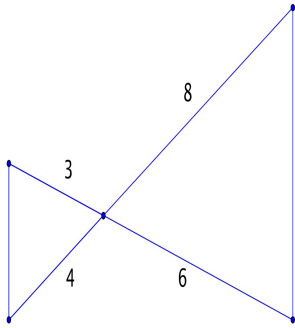
A. AA

2.



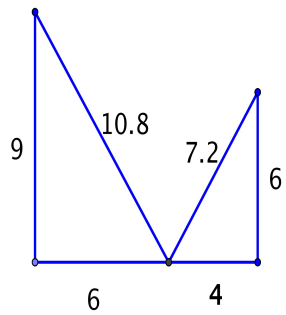
B. SAS

3.



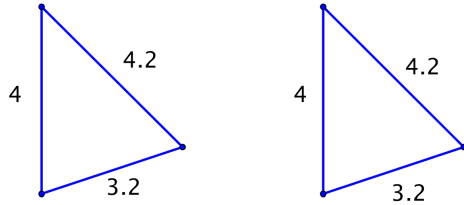
C. SSS

4.

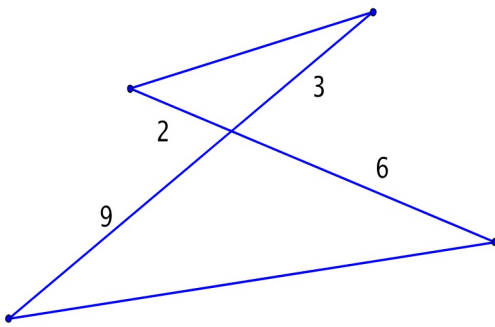


E. Congruent

5.



6.



Check your work: 1). D, 2). A, 3). B, 4). C, 5). E, also C, 6). B